

1. You can see the weekly plan of Merlyn below.

Merlyn's Weekly Planner

MONDAY	visit grandparents	FRIDAY	Go hiking
TUESDAY	Meet friends	SATURDAY	Finish science project
WEDNESDAY	Go to the cinema	SUNDAY	x
THURSDAY	x		

Alina : Hi, Merlyn. Are you busy on this Sunday?
Merlyn : - - - -
Alina : How about joining my pyjama party?
Merlyn : Sure. That sounds great.

Which of the following can be Merlyn's response according to her weekly plan above?

- A) I'm afraid, I can't. I have to finish my project.
 B) Of course, what time does it start?
 C) No, not at all. Why do you ask?
 D) I'm busy, but I can't refuse it.

2.

Aysu TÜRKOĞLU was born in 2001 in Muğla. She is crazy about swimming. She gets up early and trains for hours everyday. She is a successful Turkish swimmer. She is the youngest Turkish female swimmer to win many championships. She completed the Kaiwi Channel swim on 27th of April, 2025.



Which of the following does NOT have an answer in the text?

- A) What is her job?
 B) Which sport is she interested in?
 C) When was she born?
 D) Who does she train with?

3.

Kevin's Diary
 Saturday, April 26, 2025



The weather was warm and nice today. My dad and I cleaned our garage. It is necessary to do that twice a year. First, we threw out the garbage. Then, we organized the shelves. Finally, we mopped the floor. After we finished cleaning up, we had a delicious meal. Now, it is time to sleep. Tomorrow, I must study for Maths exam.

In the diary above, you can find information about some - - - -.

- A) trend topics
 B) classroom rules
 C) favourite food
 D) responsibilities

4. Jake would rather go different cities on his holidays. He likes walking in the streets, taking photos and joining sightseeing tours.

BLUEWORLD TRAVEL

Join our awesome tours!

1



2



3



4



For more information:
www.awesomexperience.com

Which tour should Jake prefer according to the tour brochure and information above?



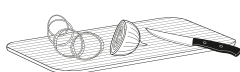

- A) Tour - 1 B) Tour - 2
C) Tour - 3 D) Tour - 4

5.

How to make salad

- ➔ Wash all the vegetables and drain them.
- ➔ Chop all the vegetables and put them in a large bowl.
- ➔ Add some olive oil and lemon juice into the vegetable mixture.
- ➔ Sprinkle a little salt over it.
- ➔ Your delicious salad is ready to eat. Enjoy!

Which picture shows the first step of the recipe?





- A) 
- B) 
- C) 
- D) 

6.



Georgia is an adrenaline lover, and she is interested in extreme sports. She would rather do individual sports than team sports.

Which sport is suitable for Georgia according to the information above?

- A) 
- B) 
- C) 
- D) 

7.

Eddie : To me, deforestation will be the most serious problem today because people damage forests too much.

Samantha : - - - - ?

Eddie : I think, people should stop cutting down trees. They should also protect forests.

Samantha

Eddie

Which of the following completes the conversation above?

- A) Do you think there will be more disasters
- B) Why do people destroy forests
- C) What should people do to prevent deforestation
- D) What are the results of cutting down trees



8.

Imagine that you're a secretary at a big company. Someone calls and asks for speaking to your manager. He is available at that time. You try to connect her.

What would you say in this situation?

- A) I'm sorry, he is in a meeting. Would you like to leave a message?
- B) Could you repeat your name, please?
- C) Hold on a moment, please. I will put you through.
- D) May I take your telephone number, please?

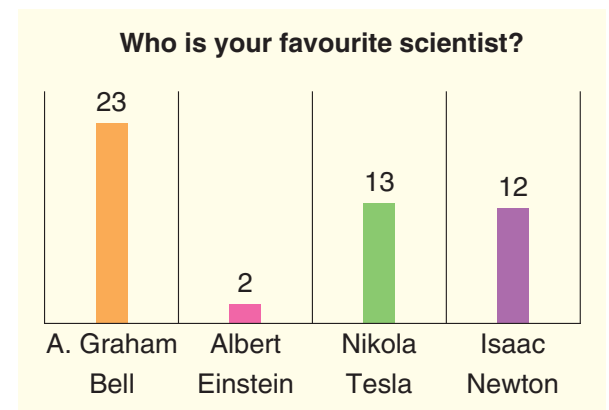
9. Helen enjoys spending time online. Here are some visuals about her Internet habits.



Which one is NOT correct according to the information above?

- A) She prefers using the Internet for her homework.
- B) She uses the Internet for fun and entertainment.
- C) She is interested in watching movies online.
- D) She loves playing games on the Internet.

10. Mrs. Richard, a science teacher made a survey for 50 students in her school, and asked them who their favourite scientist is. Here is the graphic of the results:



Which of the following is CORRECT according to the graphic above?

- A) Only a few students prefer Newton.
- B) Nearly half of the students chose Graham Bell.
- C) Less than ten students chose Nikola Tesla.
- D) Einstein is the most preferred scientist in the survey.